

Maths:
Today we are recapping...

Time – half past.

Five in five

1. $11 + 9 =$ _____

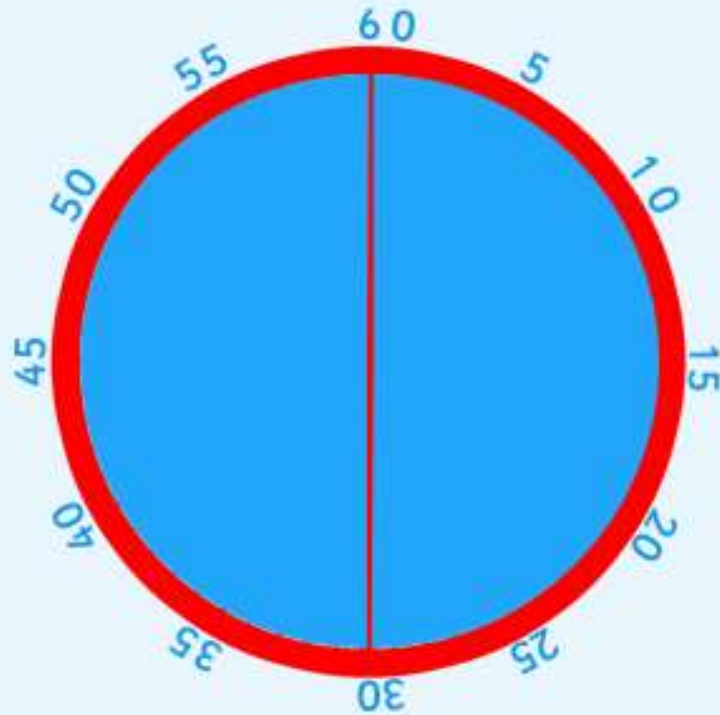
2. $13 - 3 =$ _____

3. Double 7

4. Half of 4

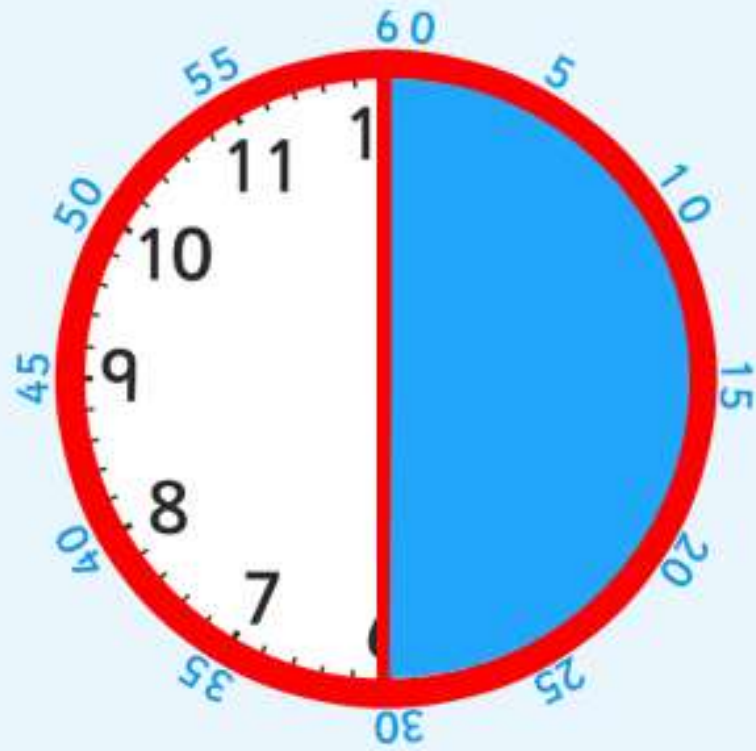
5. Monday, Tuesday, Wednesday, Thursday,
_____, Saturday, Sunday

A clock face is a full circle which is made up of 2 halves.

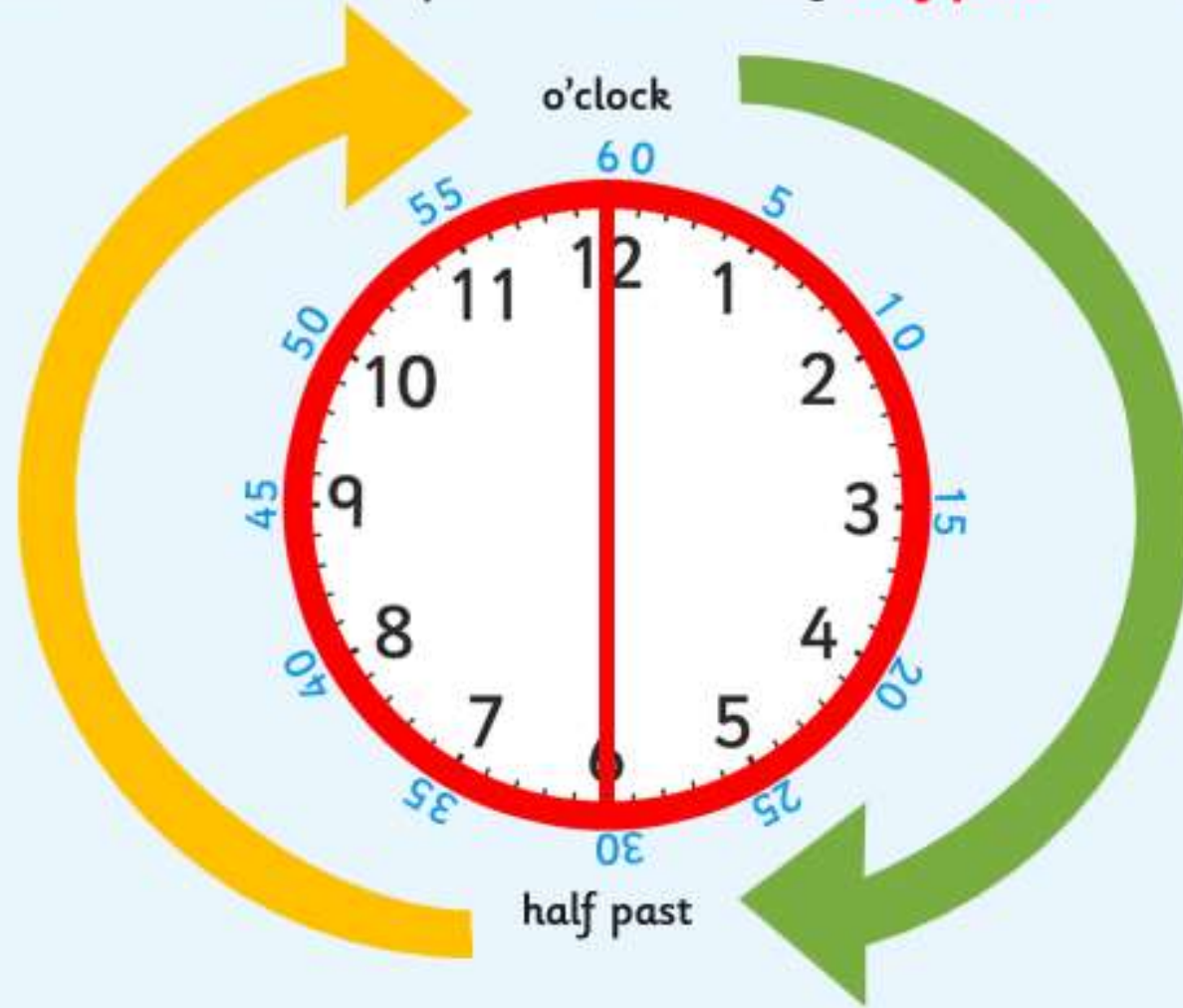


How many minutes make up half of an hour?

There are 30 minutes in half of an hour.



When it is 30 minutes past the hour we say '**half past**' the hour.



Look at this time.
The big hand is pointing at 6, which is halfway around the clock.
Where is the small hand pointing? Is it on the number?
It's half way between **1** and **2**.



half past

What time is this clock showing?

Where is the **big hand** pointing?

6

Where is the **little hand** pointing?

halfway between 11 and 12



half past

What time is this clock showing?

Where is the **big hand** pointing?

6

Where is the **little hand** pointing?

halfway between 11 and 12



The time is half past 11

What do you notice about the small hand?

It is halfway between 3 and 4.

What time is this clock showing?

Half past three.



half past

What time is it?



Did you get them correct?

What time is it?



Half past 9



Half past 5



Half past 8

Try these in your book.



Challenge -



half past 1

Lee has drawn this clock and matched it to this time. Is he correct?
Discuss or write your answer.

A large, empty rectangular box with rounded corners and a blue outline, intended for the student to write their answer to the challenge question.