

Maths:

Today we are recapping...

Ordering groups of objects.

Five in five

1. $10 + 6 =$ _____

2. $12 - 4 =$ _____


3. Double 4

4. Half of 10

5. Monday, Tuesday, Wednesday, _____,
Friday, Saturday, Sunday

Remember your tens and ones work and the vocabulary you used when comparing objects and numbers.

Order the chips from smallest to greatest.



The image shows three identical sets of french fries and chips. Each set consists of a red paper tray filled with yellow french fries and a yellow circular sticker with the number '10' on it. To the left of each tray is a small pile of three golden-brown french fries. Below each set is an empty rectangular box for writing the order.

Did you get them correct?

Order the chips from smallest to greatest.


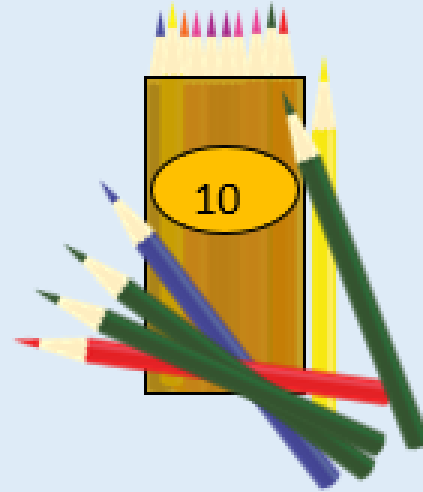
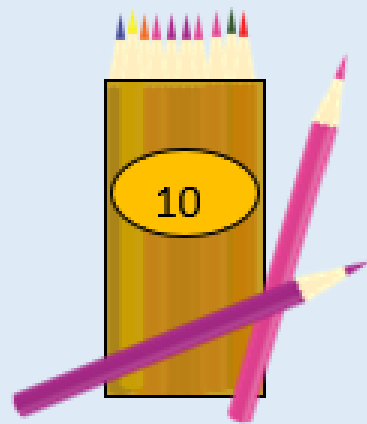
The image shows three groups of french fries. Each group consists of a side of 3 fries and a bucket of 10 fries. The bucket sizes are 13, 15, and 14 fries respectively. The groups are labeled '1st', 'last', and '2nd'.

Group	Side (Fries)	Bucket (Fries)	Label
1st	3	10	1st
last	3	10	last
2nd	3	10	2nd


Can you think of an amount less than the smallest group?

Now try this one.



Order the pencils from smallest to greatest.




Draw smiley faces in each box to make it correct.









Smallest






Greatest



Work out how many objects there are and write them in the right order in your books.
Make sure you order them from **smallest to greatest**.

 <input data-bbox="509 642 726 763" type="text"/>	 <input data-bbox="1172 642 1388 763" type="text"/>	 <input data-bbox="1809 642 2025 763" type="text"/>
 <input data-bbox="509 1135 726 1256" type="text"/>	 <input data-bbox="1172 1135 1388 1256" type="text"/>	 <input data-bbox="1809 1135 2025 1256" type="text"/>

Now work out how many in each group this time and order them from **greatest to smallest**.

 <input type="text"/>	 <input type="text"/>	 <input type="text"/>
---	---	---

 <input type="text"/>	 <input type="text"/>	 <input type="text"/>
--	--	--

Challenge –

Make this correct.

