

Tuesday 9th June 2020

Today we are recapping...

English: Analysing a persuasive advert

Maths: Find equivalent lengths using millimetres and centimetres

Spelling: Speed write

PE: Spell and Groove.. Get into the groove



English

Tuesday 9th June 2020

I can analyse a persuasive advert.

Starter- Co-ordinating Conjunction

Find the coordinating conjunctions below.

so she yet they
 four and for
or nor said but

Underline the coordinating conjunction in the sentence below.

Jay made some lunch, for he was feeling hungry.

Starter- Recognising Determiners **ANSWERS**

Find the coordinating conjunctions below.

so

she

yet

they

four

and

for

or

nor

said

but

Underline the coordinating conjunction in the sentence below.

Jay made some lunch, for he was feeling hungry.

Here is an online advert.

Read the advert and follow the instructions at the bottom of the page.

Can you see any other features? If so, make a list of them in your book.

What do you like about this advert?

How could you improve this advert?

Text Marking a Persuasive Advert



Terry's
Terrific
Toy Store!

Sign In Basket

Store Locator

Help

OFFERS! £££

Interactive Baby Dragon 0743/6928



Bored of dull toys? Want a toy that plays with you? Then you need this must-have toy of the year.

Cool kids like you deserve the coolest toy around!

When your Interactive Baby Dragon arrives, it will be tucked inside a colourful egg. Your dragon will only hatch if you give it oodles of love and attention.

Watch with delight as your dragon bursts out of its shell. Now it's ready to play and learn. Teach your dragon 100's of new words. Listen with amazement as it talks back to you. On your command, your dragon will even breathe smoke!

Choose from these exciting colours: roaring red and yummy yellow; or perfect pink and prickly purple.

Order before the end of the month and this dragon will be delivered **FREE** to your door!

Bag a Bargain at Terry's Terrific Toy Store!



Was £40.00 | Now only
£36.00

10% off! Hurry, whilst stocks last!

Reviews

 Five Stars
Best toy ever! My 6 year old son loves it! – Mary Smith

 Five Stars
Delivered on time. The toy hatched out after 3 days and it now knows more than 50 words. It really does breathe smoke! – Jake Hall

Text Marking

1. Draw a yellow line around special offers.
2. Draw a green line around the slogan.
3. Underline examples of alliteration in blue.
4. Underline examples of questions in purple.
5. Underline examples of adjectives in red.

Maths

Today we are recapping
length

I can find equivalent lengths using millimetres and
centimetres.

Five in 5

1) $913+72=$

2) $362=122=$

3) $9\times 4=$

4) $33\div 3=$

5) What is double 320?

Five in 5-Answers

1) $913+72=$

2) $362-122=$

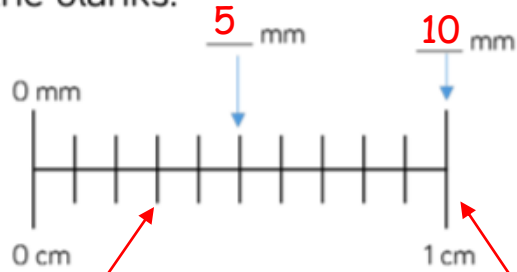
3) $9 \times 4=$

4) $33 \div 3=$

5) What is double 320?

Remember a millimetre is smaller than a centimetre.
Can you remember how many millimetres are in 1cm?

Fill in the blanks.

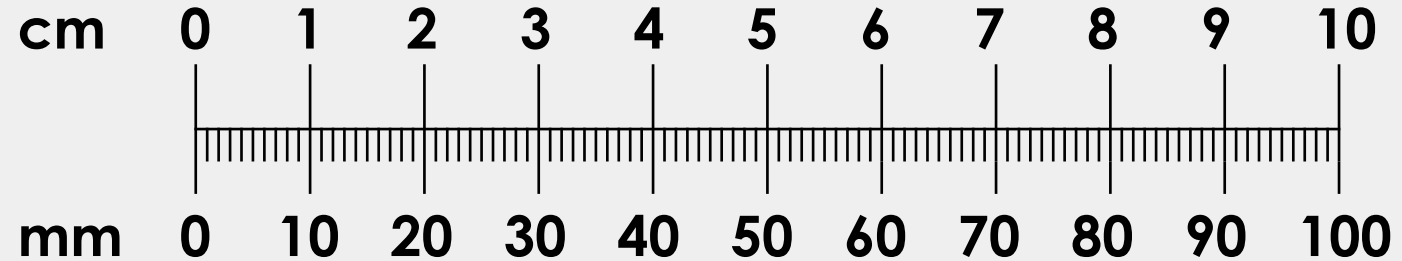


There are 10 mm in 1 cm.

Each of these lines represent 1mm. For example this is 3mm.

You know that there are 10mm in 1cm.

1cm is equal to 10mm.
Use this information to complete these conversions.



$$20\text{mm} = \boxed{} \text{cm}$$

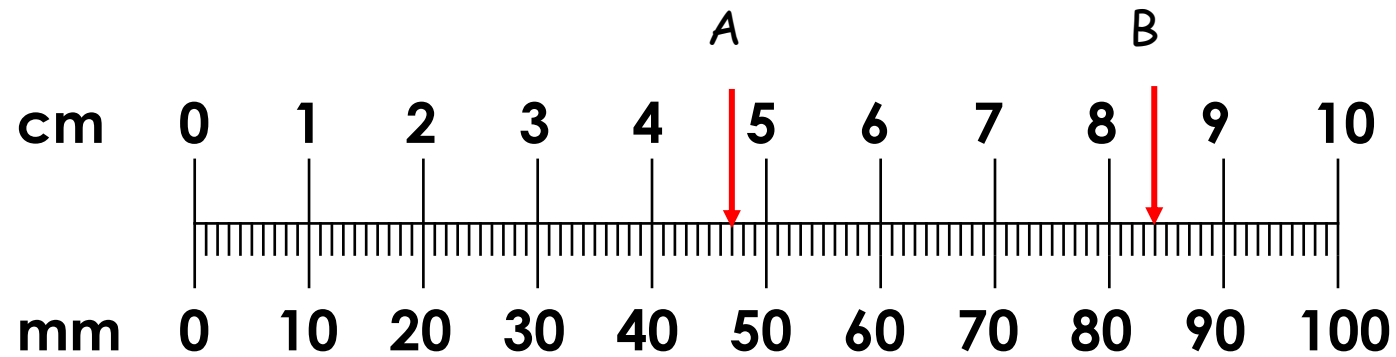
You can see that 20mm is equivalent to 2cm

$$\boxed{} \text{mm} = 4 \text{ cm}$$

How many mm are in 4cm.
Multiply 4 by 10.
 $4 \times 10 = 40\text{mm}$

$$300\text{mm} = \boxed{} \text{cm}$$

300mm is equivalent to how many cm? $300 \div 10 = 30\text{cm}$



The A arrow is after 4cm and then if you count each of the mm lines it is 7mm.

A represents 4cm and 7mm.

4cm and 7mm is equivalent to 47mm.

The B arrow is after 8cm and then if you count each of the mm lines it is 4mm.

B represents 8cm and 4mm.

8cm and 4mm is equivalent to 84mm.

Your turn

1) Join the equivalent lengths:
Equivalent means equal (the same)

48mm

93mm

721mm

4cm 8mm

9cm 3mm

72cm 1mm

2) Circle the longest length

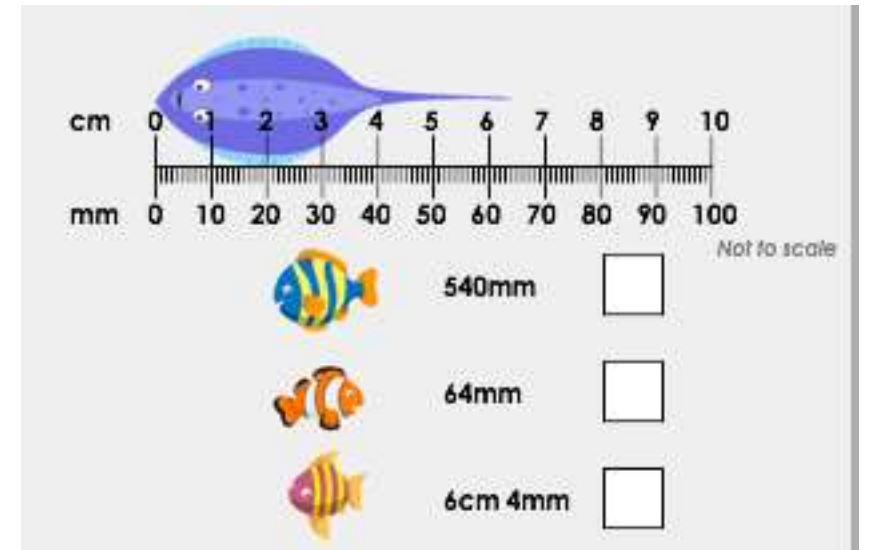
7cm 4mm

733mm

8cm 3mm

9cm 5mm

3) Tick the correct measurement.



Challenge

Who is correct? Prove it.



Asad

My pet snake is the longest. It is 889mm long.

My pet snake is the longest. It is 89cm 9mm long.



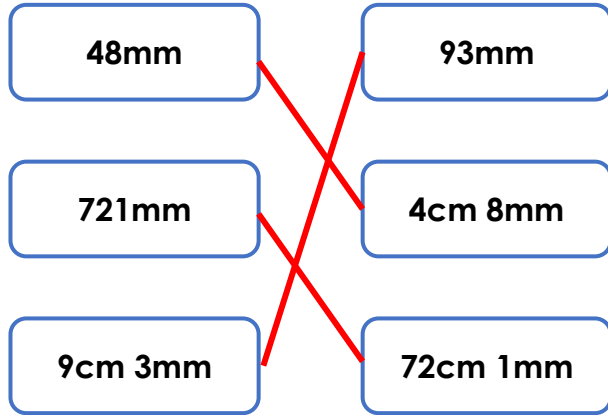
Sam

Spot two mistakes. Explain your answer.

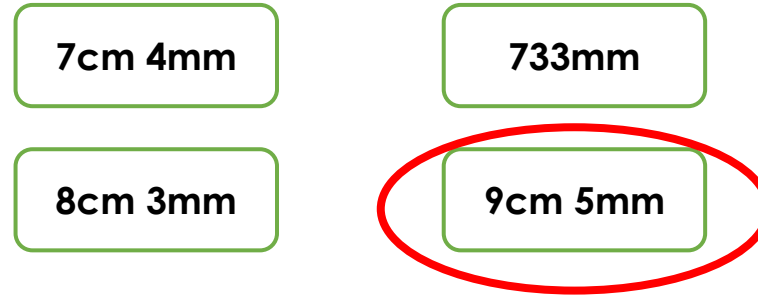
cm and mm	mm
25cm and 6mm	256mm
5cm and 8mm	58mm
9cm and 8mm	88mm
8cm and 2mm	28mm
53cm and 1 mm	531mm

Answers

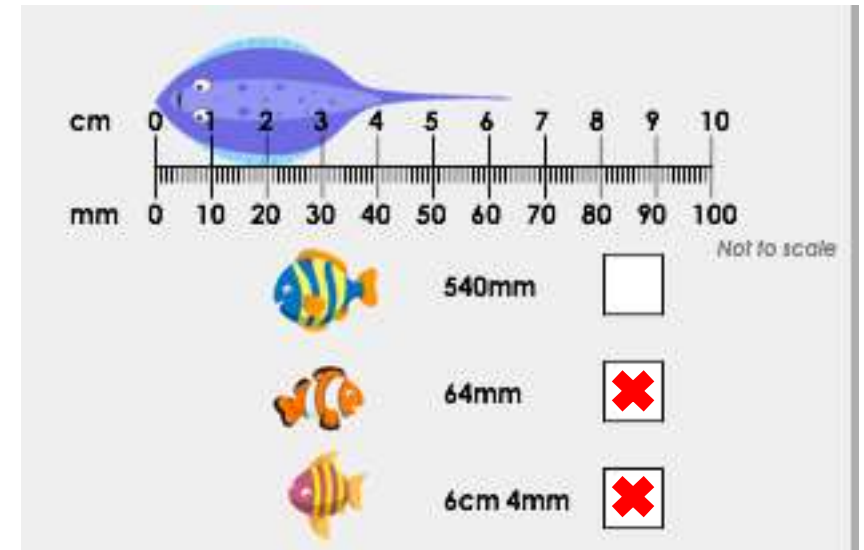
1) Join the equivalent lengths:
Equivalent means equal (the same)



2) Circle the longest length



3) Tick the correct measurement.



Answers

Who is correct? Prove it.



Asad

My pet snake is the longest. It is 889mm long.



Sam

My pet snake is the longest. It is 89cm 9mm long.

Sam is correct because his snake is 89cm 9mm long which is equal to 899mm. 899mm is longer than 889mm.

Spot two mistakes. Explain your answer.

cm and mm	mm
25cm and 6mm	256mm
5cm and 8mm	58mm
9cm and 8mm	88mm
8cm and 2mm	28mm
53cm and 1 mm	531mm

9cm and 8mm and 8cm and 2mm are wrong because 9cm and 8mm is equivalent to 98mm and 8cm and 2mm is equivalent to 82mm.

Extension

Use your school login to log in and complete some challenges!



<https://play.ttrockstars.com/auth/school/student/3505>

Spelling

How many times can you write each word in 60 seconds?



scope
telescope
microscope
horoscope
periscope
inspect
spectator
respect
perspective
spectacles

P.E.

Spell and move... get into the groove!

Use some of your spellings from this week to create a workout. Each letter in the spelling has an exercise to go with it.

Put all the letters from each spelling together and you have created a workout. E.g. If your spelling is 'gold', you would do the exercises near **G**, **O**, **L** and **D**.

A	Do 10 hops on your right leg.	G	Walk like a penguin for 10 seconds.
B	Do 5 press-ups.	H	Jog with high knees for 10 seconds.
C	Do 5 sit-ups.	I	Squat 5 times.
D	Do 15 star jumps.	J	Turn around then touch your toes.
E	Run to one end of the room and back.	K	Balance on your left foot for 15 seconds.
F	Jog on the spot for 30 seconds.	L	Do 10 side steps.

M	Jump like a frog 5 times.	S	Move like a crab from one side of the room to the other.
N	Do 10 burpees.	T	March on the spot for 10 seconds.
O	Bend and touch your toes for 5 seconds.	U	Do 10 hops on your left leg.
P	Jump up and down 10 times.	V	Reach for the sky for 5 seconds.
Q	Balance on your right foot for 15 seconds.	W	Pretend you're playing tennis for 10 seconds.
R	Hop to the kitchen and back.	X	Pretend you are swimming from one side of the room to the other.

Y	Dribble an invisible basketball 10 times.
Z	Do a funny dance move for 10 seconds.

scope
telescope
microscope
horoscope
periscope
inspect
spectator
respect
perspective
spectacles