

# Year 2 Home Learning

## Tuesday 9<sup>th</sup> June

This PowerPoint has all of your work for Tuesday

English  
Spelling  
Reading  
Maths  
Topic

# English:

Tuesday 9<sup>th</sup> June

I can plan a recount of my half term holiday.

# Grammar starter- Functions of sentences

**Can you match the sentence with the correct sentence type?**

Sentence	Type of Sentence
It is a beautiful day.	<b>statement</b>
Where should we have our picnic?	<b>question</b>
Take the sandwiches out of the lunch box.	<b>command</b>
What a mess we have made!	<b>exclamation</b>

# Check your answer.


**Can you match the sentence with the correct sentence type?**

Sentence	Type of Sentence
It is a beautiful day.	<b>statement</b>
Where should we have our picnic?	<b>question</b>
Take the sandwiches out of the lunch box.	<b>command</b>
What a mess we have made!	<b>exclamation</b>

# Statements-

Any sentence is correct as long as it tells you something about the animal and ends in a full stop.

Can you write one **statement** sentence that describes each of these animals?



# Check your answer:

The elephant has a long trunk.

The giraffe has a long neck.

The zebra has stripes.

The lion is fierce.

Today we are going to plan our recount. You are going to create a table in your book to show the events you did each day of the half term.

Day	Main event	Best part of the day
Monday		
Tuesday		
Wednesday		
Thursday		
Friday		
Saturday		
Sunday		



# Reading:

Tuesday 9<sup>th</sup> June

I can write about my favourite part of the story so far.

Look back at the picture you drew yesterday of your favourite part of the story. Write a sentence explaining why it is your favourite part.

# Tuesday Maths:

# Today we are recapping...

Place Value - Counting in 3s.

<https://www.youtube.com/watch?v=OLjzvbTw8E4&t=8s>

# Five in 5

1.  $54 + 12 = \underline{\quad}$

2.  $\underline{\quad} = 35 - 12$

3.  $9 \times 3 = \underline{\quad}$

4.  $15 \div 3 = \underline{\quad}$

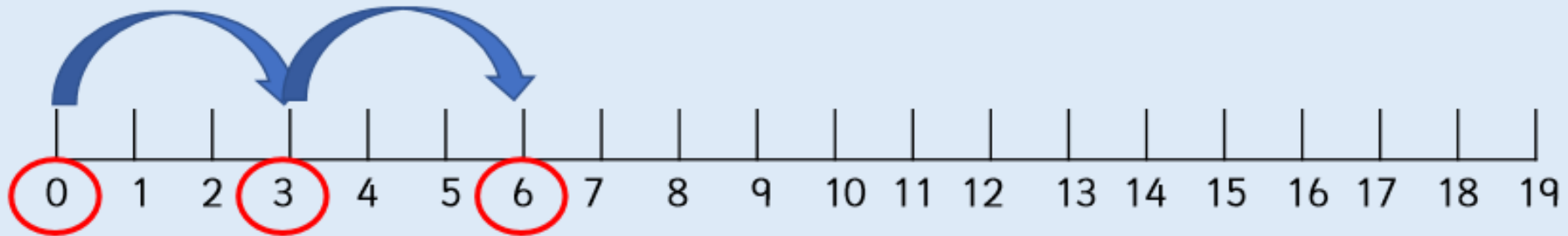
5.  $33 - 29 = \underline{\quad}$

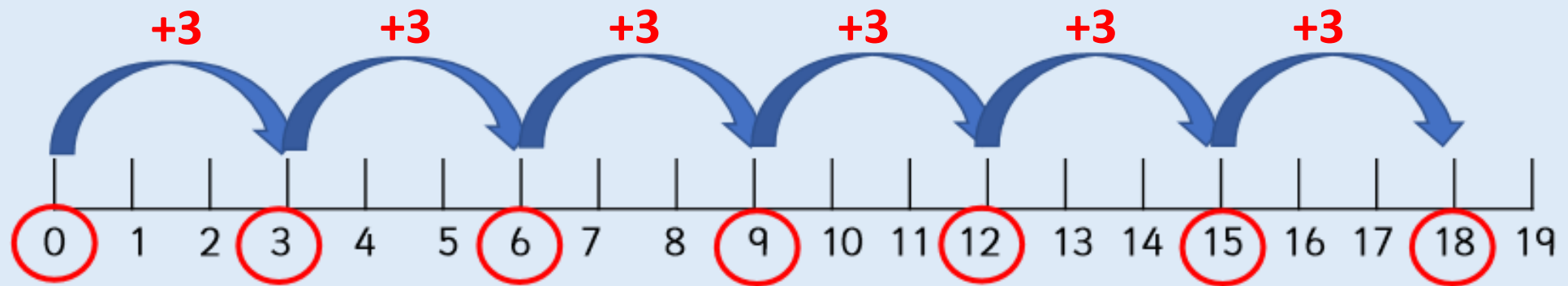


Write the answers in your work book.

# Introduction:

What do you notice about the numbers that are circled?  
Continue the pattern.



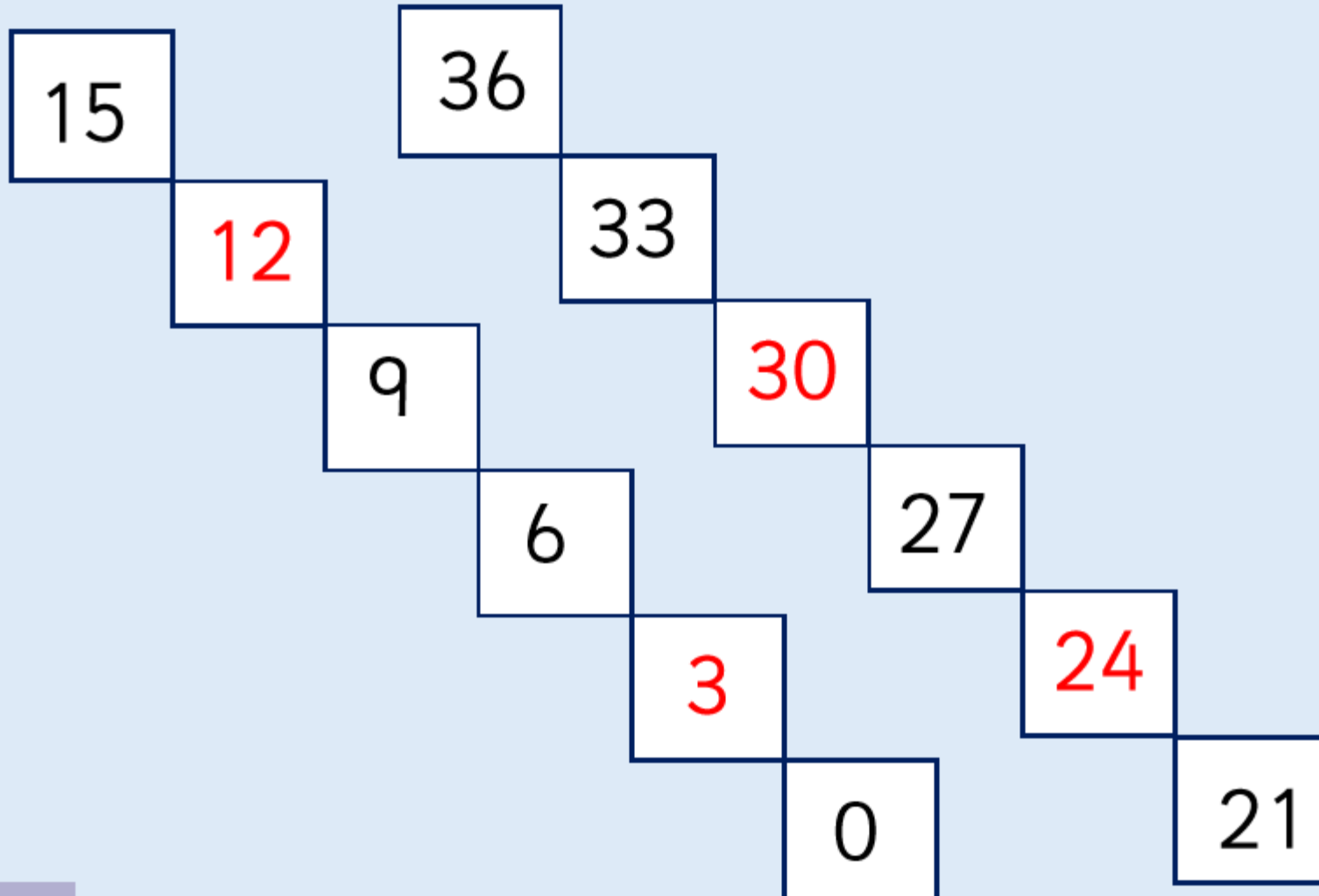


They are in jumps of three.



# Did you get the correct answers?

Complete the number sequences.






Write the title:

I can count in 3s.

Write the answers in your work book.

Fill in the missing parts of the number sentence.




1.  + 3 = 12

2. 21  3 = 24

3. 18 - 3 =

# Did you get the correct answers?

Fill in the missing parts of the number sentence.



1.  + 3 = 12


2. 21  3 = 24

3. 18 - 3 =

# Challenge:

Malachi is counting in 2s, Zach is counting in 3s.

Malachi	2	4	6	8
Zach	3	6	9	12
Total				



If we add our numbers together as we count, we can make a new pattern.

What pattern do they make?  
What happens if both Malachi and Zach count in 5s and they add them together to make a new pattern?

# Challenge answer:

Malachi is counting in 2s, Zach is counting in 3s.

Malachi	2	4	6	8
Zach	3	6	9	12
Total	5	10	15	20

If we add our numbers together as we count, we can make a new pattern.

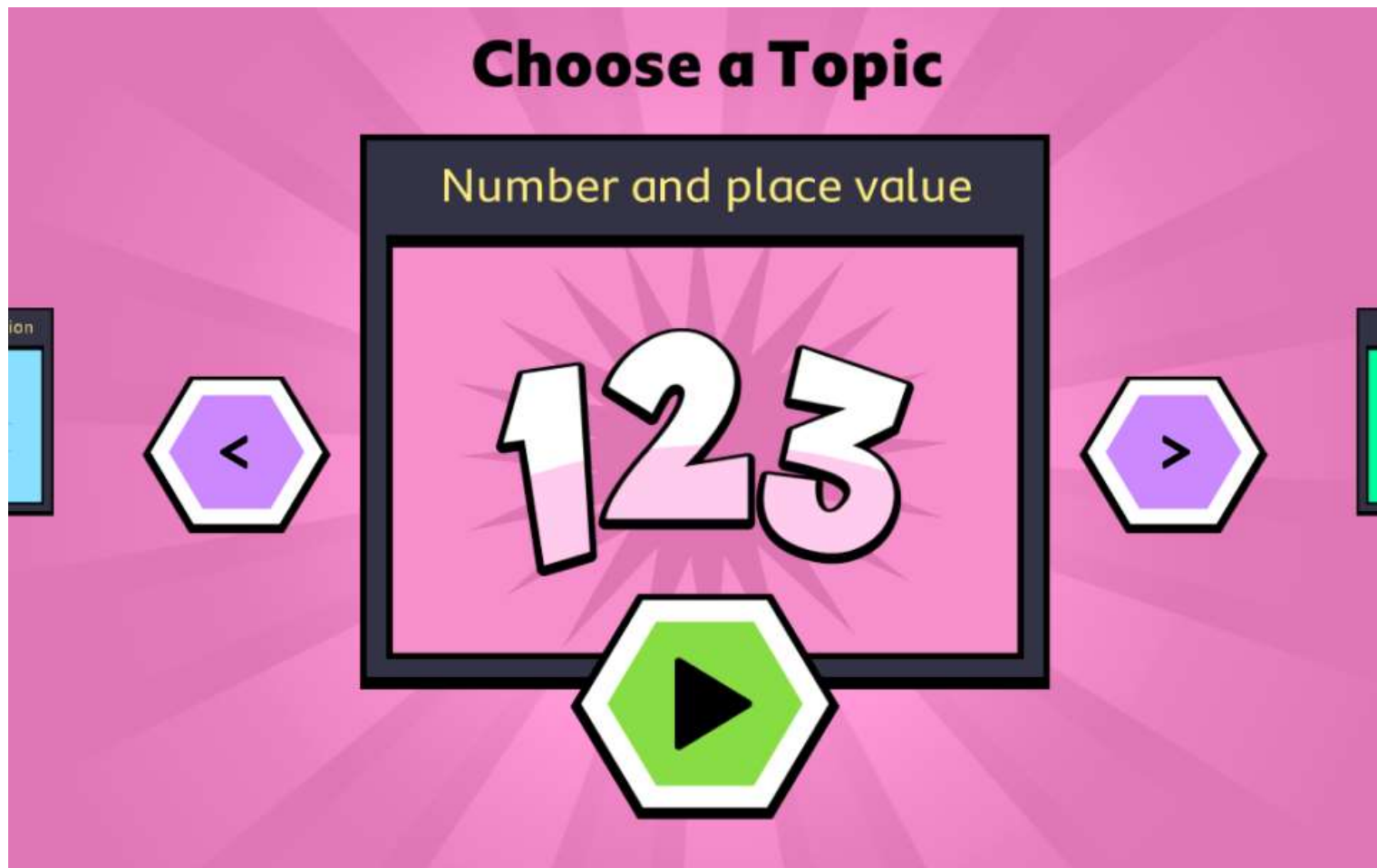


What pattern do they make?

What happens if both Malachi and Zach count in 5s and they add them together to make a new pattern?

If Malachi and Zach add their numbers together, they will be counting in 5s.

If Malachi and Zach both count in 5s, they will be counting in 10s.



Click on Number and place value.

<https://www.bbc.co.uk/games/embed/karate-cats-2?exitGameUrl=http%3A%2F%2Fbbc.com%2Fbitesize%2Farticles%2Fzf4sscw>



## Extension

Practice your timetables on TTRockstars.

<https://play.ttrockstars.com/auth/school/student/3505>

Play on the tournament Miss Dunning's class verse Miss Carroll's class.

Help your class to win by earning points practicing your times tables on TTRockstars!

# Spelling: Tuesday 9<sup>th</sup> of June

Words ending in -tion.

<https://www.youtube.com/watch?v=xpvpJ8EtXOA>

# Watch Mr Thorne Does Spelling...



[https://www.youtube.com/watch?v=WcTFjYSRq\\_k](https://www.youtube.com/watch?v=WcTFjYSRq_k)



Here are this week's spellings to practise.

station

addition

fiction

subtraction

motion

potion

national

option

section


introduction



# Tuesday 9<sup>th</sup> of June

## Spelling Crossword

This week we are looking at words that end in -tion. Work out the answer to each clue and write the letters in the right boxes.



### Across:

1. the place to catch a train
2. a choice
3. a maths operation where numbers are put together
4. a mixture of ingredients often made in fairy tales
5. movement

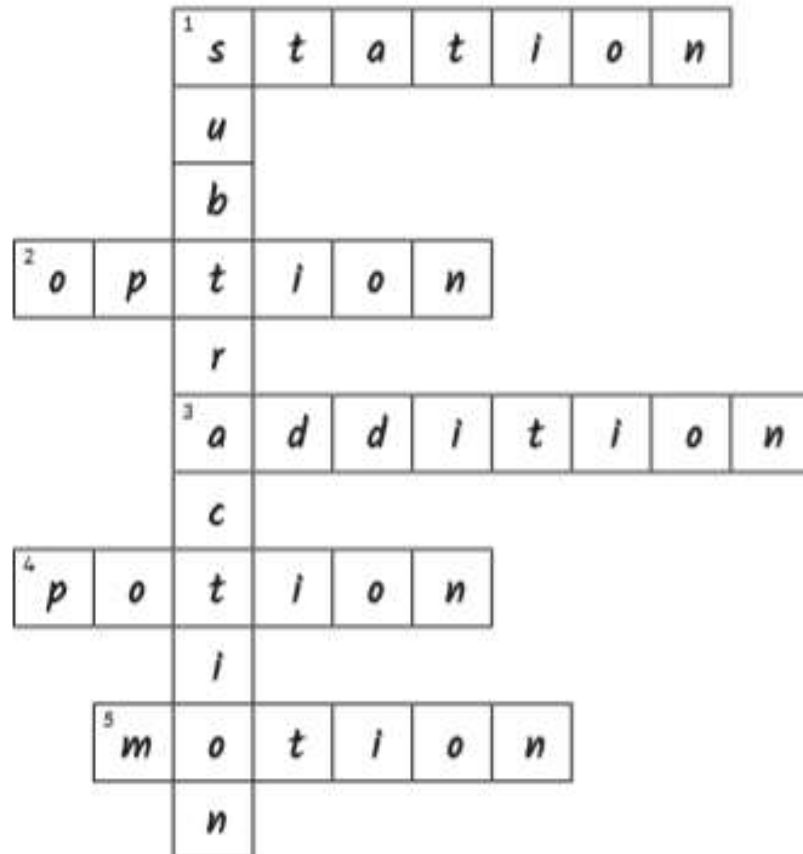
### Down:

1. a maths operation where a number is taken away from another number

# Did you get the correct answers?

## Spelling Crossword - Answers

This week we are looking at words that end in -tion. Work out the answer to each clue and write the letters in the right boxes.



### Across:

1. the place to catch a train
2. a choice
3. a maths operation where numbers are put together
4. a mixture of ingredients often made in fairy tales
5. movement

### Down:

1. a maths operation where a number is taken away from another number

# Topic

Tuesday 9<sup>th</sup> June

I can label the four countries of The United Kingdom.

Can you remember when we learnt  
about the United Kingdom (UK)?

What are the four countries that make up the UK?

Explore the UK on BBC Bitesize.

<https://www.bbc.co.uk/bitesize/topics/zyhp34j/articles/z4v3jhv>

# Did you get the correct countries?

England

Northern Ireland

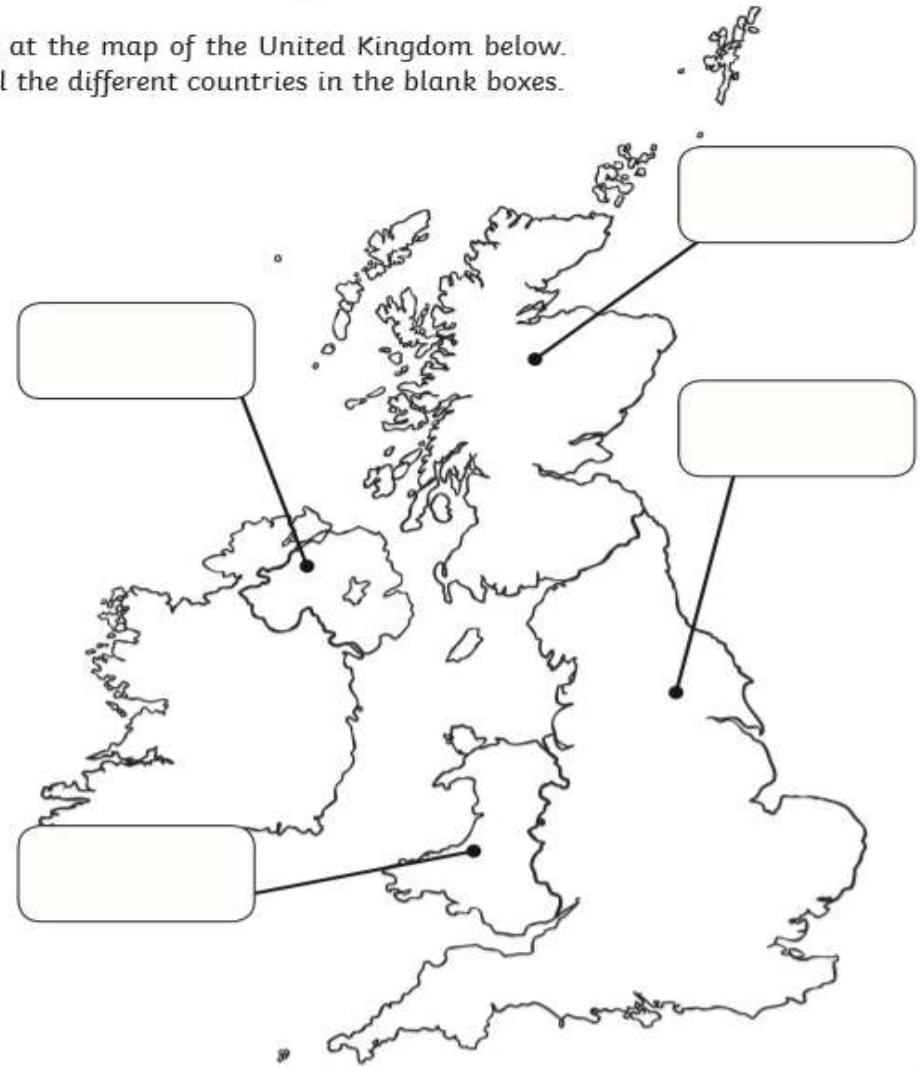
Scotland

Wales

# Label the countries.

## Countries of the United Kingdom

Look at the map of the United Kingdom below.  
Label the different countries in the blank boxes.



Use the name of the countries below to help you.

England    Scotland    Wales    Northern Ireland



# Check your answers:

